



## P4-7

MY ANSWERS:

### Zone 1

Go to **PANEL 11.**

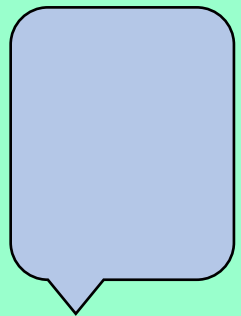
Count the number of birds you can see and count the number of fish you can see, now **multiply** these together!



### Zone 2

Go to **PANEL 34**

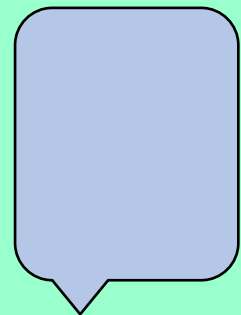
Count the number of books you can see, **divide** this by two!



### Zone 3

Go to **PANEL 46**

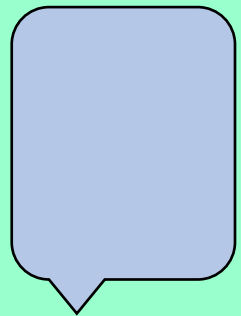
Count the number of Scotland flags you can see, and count the number of England flags you can see, now **multiply** these together!



### Zone 4

Go to **PANEL 79**

Count the number of people you can see, **divide** this by the number of dogs you can see.



# Maths Week Scotland: Crack The Code!

P4-7

MY ANSWERS:

Zone 5

Go to **PANEL 97** and count the number of footballs.

Go to **PANEL 102** and count the number of rugby balls.

**Multiply** these together!

Zone 6

Go to **PANEL 126**

Count the number of birds you see and **divide** this by the number of hats you see.

Go to **PANEL 154**

Zone 7

Count the number of red dots and count the number of blue dots, **add** these together.

Then, count the number of green dots and **subtract** this from your answer

**ADD YOUR ANSWERS TOGETHER AND WRITE THEM IN THE BOX BELOW TO CRACK THE CODE AND CLAIM YOUR PRIZE:**

